


# 2021 WORKSHEET 5

## NUMERACY YEAR 3

Answer all the questions in the Mathematics Activity book.

1. Colour the fraction shown under each diagram.


a.



$$\frac{1}{4}$$

(1 mark)


b.



$$\frac{1}{2}$$

(1 mark)


c.



$$\frac{2}{3}$$

(1 mark)

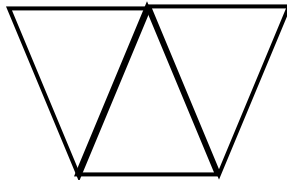
d.



$$\frac{2}{4}$$

(1 mark)


e.



$$\frac{1}{3}$$

(1 mark)

f.



$$\frac{3}{4}$$

(1 mark)